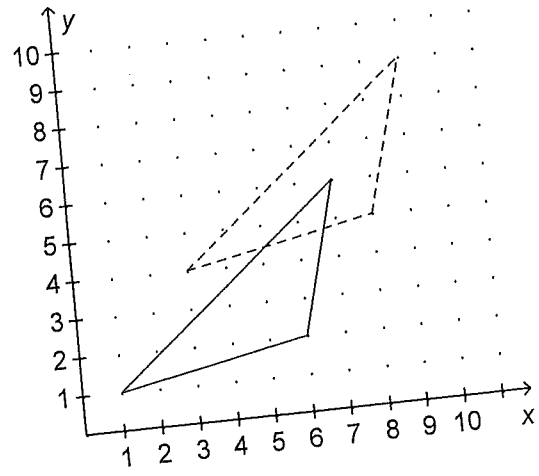


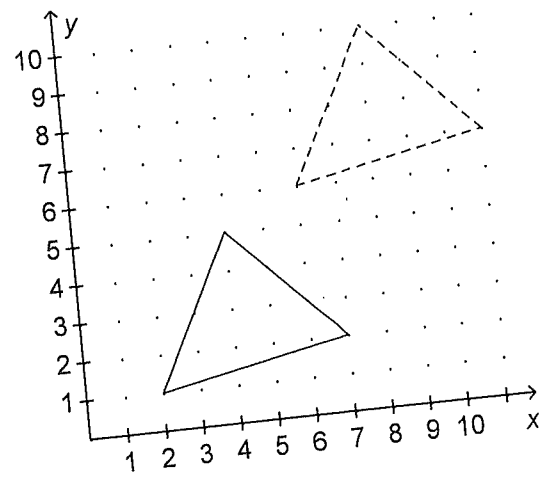
Name: \_\_\_\_\_

13. How many units has the triangle been translated right to create the dashed triangle?



- a. 2 units
- b. 4 units
- c. 3 units
- d. 5 units

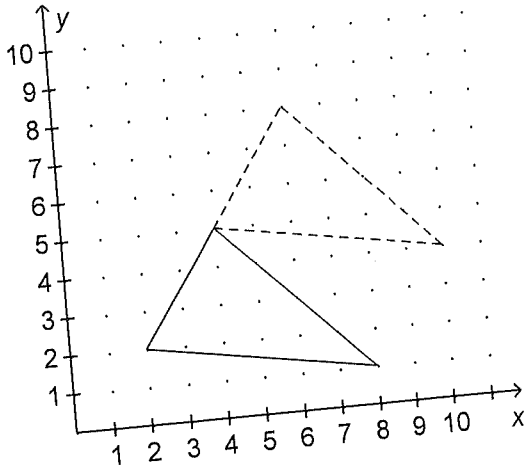
14. How many units has the triangle been translated up to create the dashed triangle?



- a. 5 units
- b. 4 units
- c. 3 units
- d. 6 units

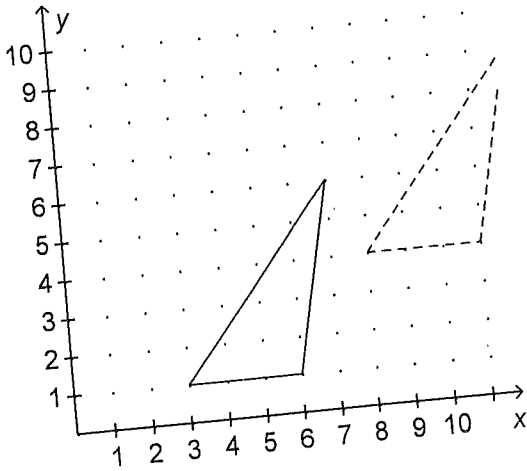
Name: \_\_\_\_\_

15. How many units has the triangle been translated right to create the dashed triangle?



- a. 4 units
- b. 3 units
- c. 2 units
- d. 5 units

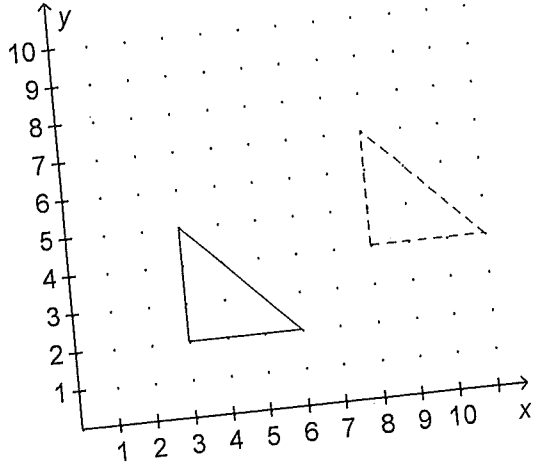
16. How many units has the triangle been translated right to create the dashed triangle?



- a. 2 units
- b. 5 units
- c. 6 units
- d. 3 units

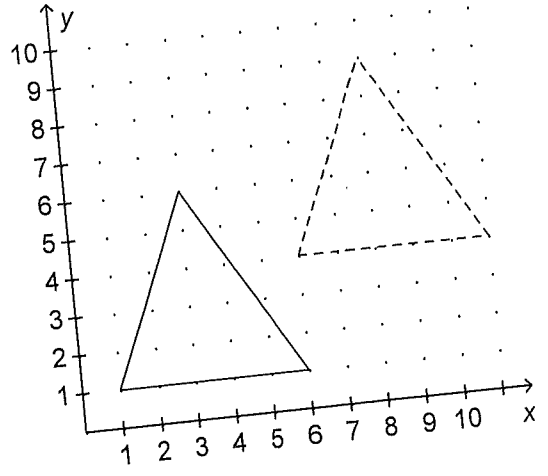
Name: \_\_\_\_\_

17. How many units has the triangle been translated up to create the dashed triangle?



- a. 6 units
- b. 5 units
- c. 4 units
- d. 2 units

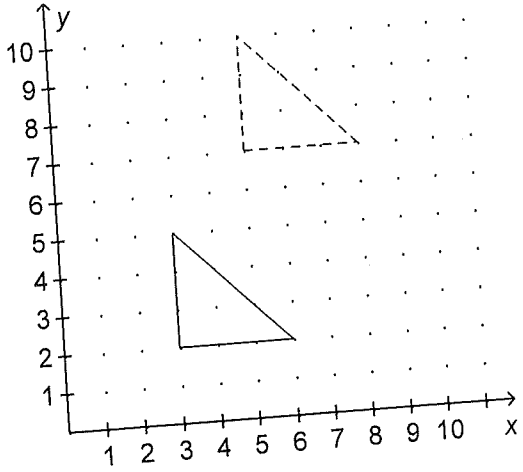
18. How many units has the triangle been translated up to create the dashed triangle?



- a. 4 units
- b. 5 units
- c. 3 units
- d. 2 units

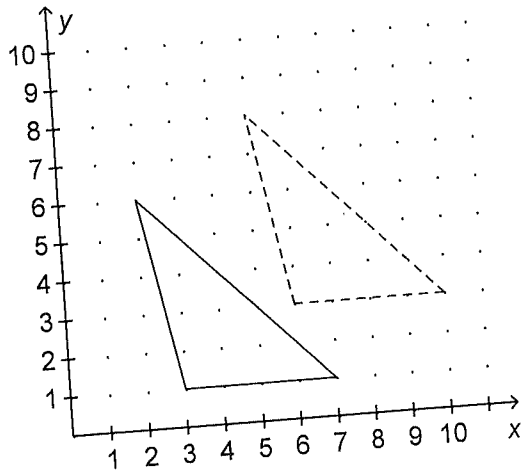
Name: \_\_\_\_\_

19. How many units has the triangle been translated up to create the dashed triangle?



- a. 4 units
- b. 3 units
- c. 5 units
- d. 2 units

20. How many units has the triangle been translated right to create the dashed triangle?



- a. 2 units
- b. 6 units
- c. 4 units
- d. 3 units