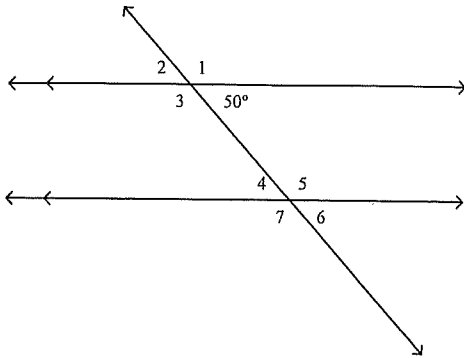


Name: _____

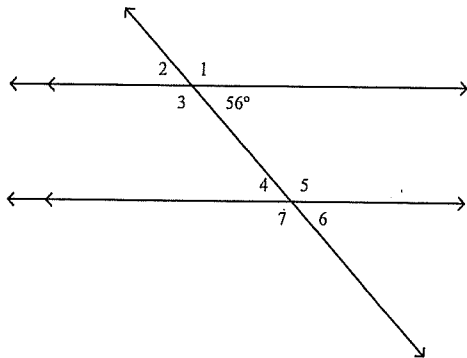
HW

25. Find the measure of $\angle 4$.



- a. 50°
- b. 130°
- c. 80°
- d. 54°

26. Find the measure of $\angle 4$.

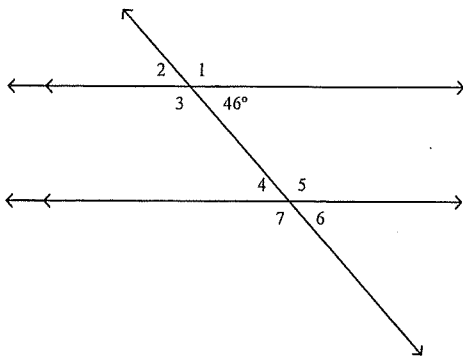


- a. 56°
- b. 124°
- c. 86°
- d. 60°

Name: _____

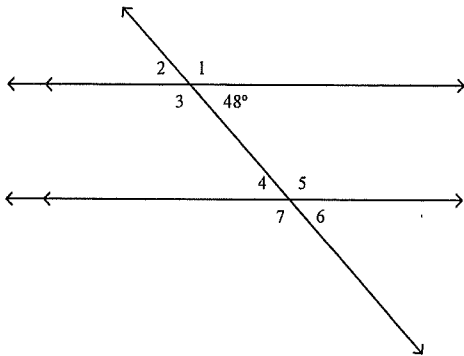
ID: A

___ 27. Find the measure of $\angle 4$.



- a. 46°
- b. 134°
- c. 76°
- d. 50°

___ 28. Find the measure of $\angle 6$.

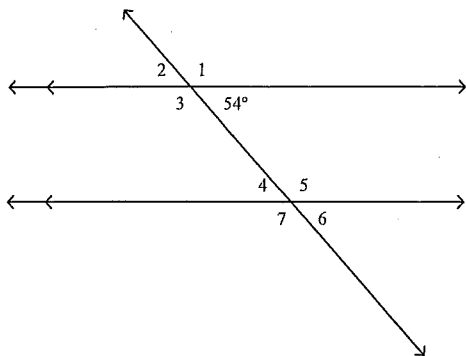


- a. 48°
- b. 132°
- c. 78°
- d. 54°

Name: _____

ID: A

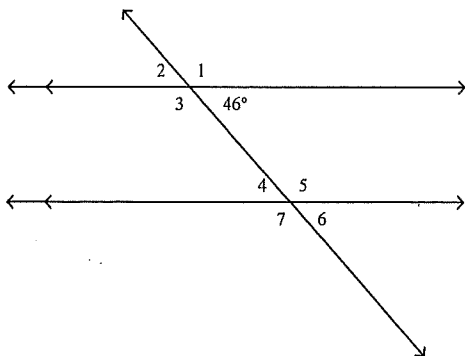
____ 29. Find the measure of $\angle 4$.



- a. 54°
- b. 126°

- c. 84°
- d. 58°

____ 30. Find the measure of $\angle 6$.



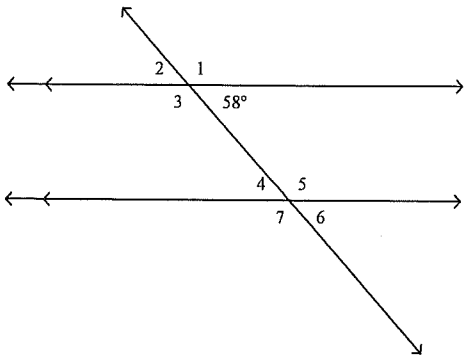
- a. 46°
- b. 134°

- c. 76°
- d. 52°

Name: _____

ID: A

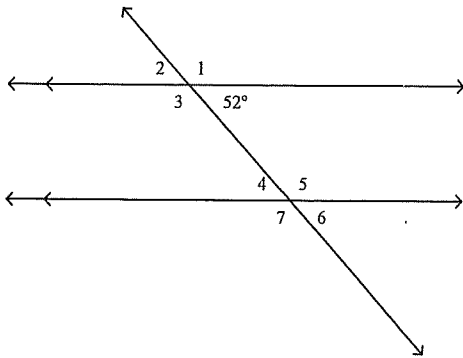
____ 31. Find the measure of $\angle 4$.



- a. 58°
- b. 122°

- c. 88°
- d. 62°

____ 32. Find the measure of $\angle 7$.



- a. 128°
- b. 52°

- c. 82°
- d. 59°