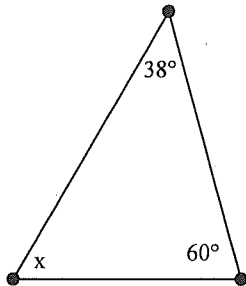


Name: _____

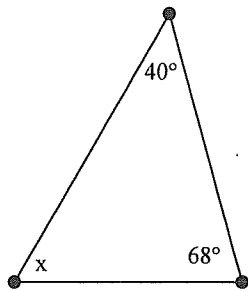
HW ID: A

28. What is the degree of the missing angle in the acute triangle?



- a. 82°
- b. 180°
- c. 98°

29. What is the degree of the missing angle in the acute triangle?

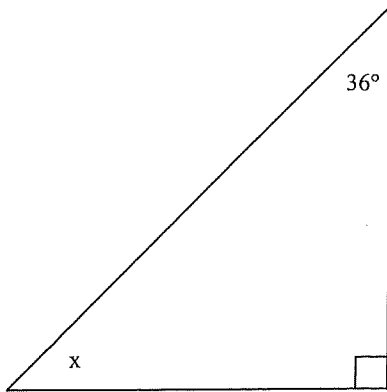


- a. 180°
- b. 72°
- c. 108°

Name: _____

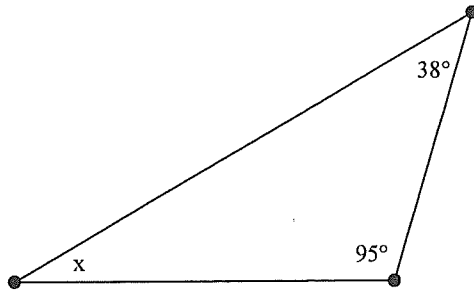
ID: A

___ 30. What is the degree of the missing angle in the right triangle?



- a. 54°
- b. 90°
- c. 46°

___ 31. What is the degree of the missing angle in the obtuse triangle?

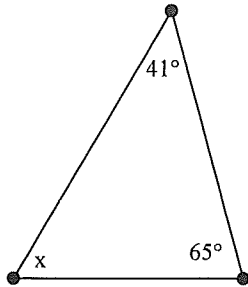


- a. 180°
- b. 133°
- c. 47°

Name: _____

ID: A

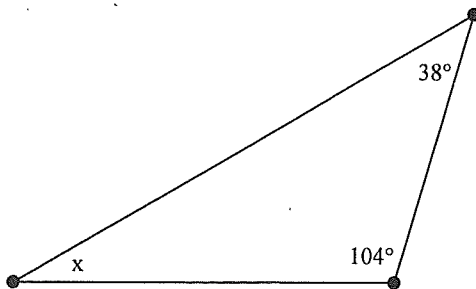
____ 32. What is the degree of the missing angle in the acute triangle?



- a. 106°
- b. 74°

c. 180°

____ 33. What is the degree of the missing angle in the obtuse triangle?



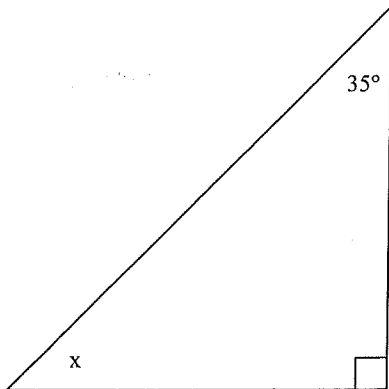
- a. 180°
- b. 142°

c. 38°

Name: _____

ID: A

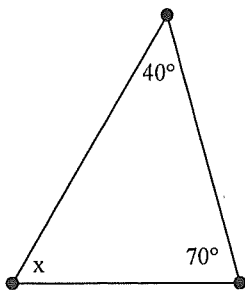
___ 34. What is the degree of the missing angle in the right triangle?



- a. 90°
- b. 55°

c. 45°

___ 35. What is the degree of the missing angle in the acute triangle?



- a. 180°
- b. 70°

c. 110°