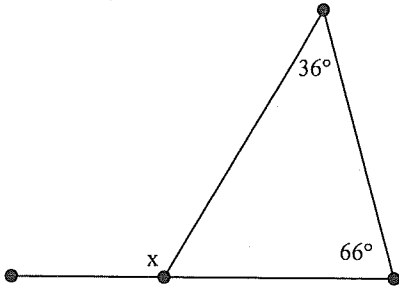


Name: \_\_\_\_\_

HW

ID: A

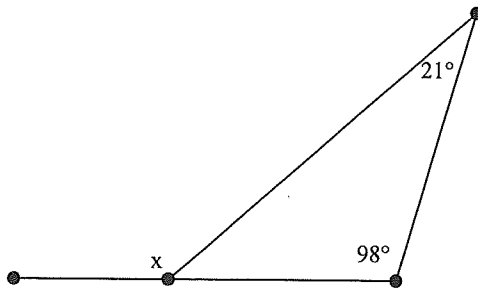
\_\_\_ 24. What is the degree of the exterior angle?



- a.  $180^\circ$
- b.  $78^\circ$

c.  $102^\circ$

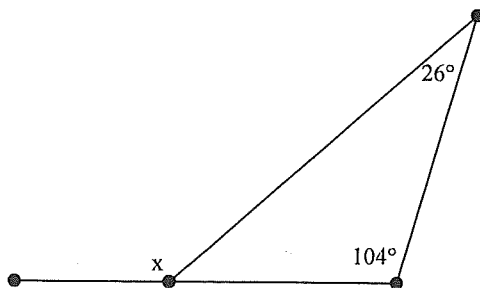
\_\_\_ 25. What is the degree of the exterior angle?



- a.  $180^\circ$
- b.  $119^\circ$

c.  $61^\circ$

\_\_\_ 26. What is the degree of the exterior angle?



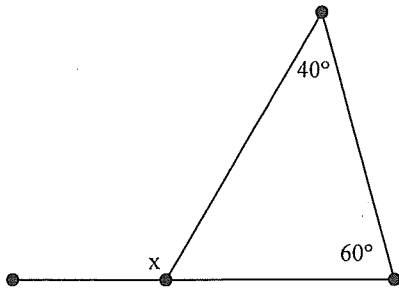
- a.  $180^\circ$
- b.  $130^\circ$

c.  $50^\circ$

Name: \_\_\_\_\_

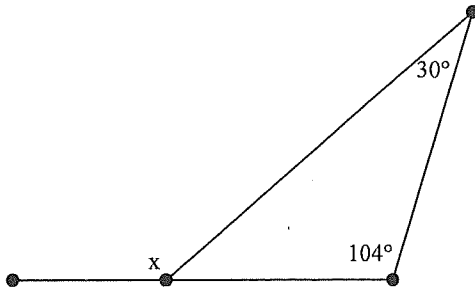
ID: A

\_\_\_\_ 27. What is the degree of the exterior angle?



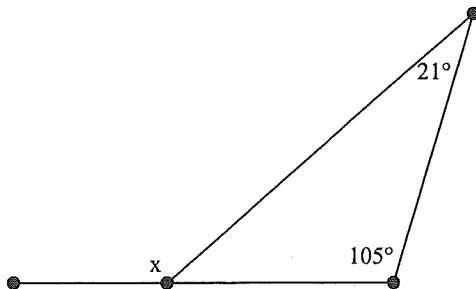
- a.  $100^\circ$
- b.  $180^\circ$
- c.  $80^\circ$

\_\_\_\_ 28. What is the degree of the exterior angle?



- a.  $180^\circ$
- b.  $134^\circ$
- c.  $46^\circ$

\_\_\_\_ 29. What is the degree of the exterior angle?

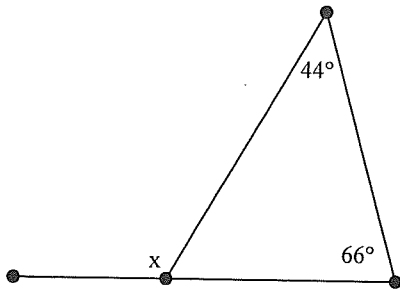


- a.  $54^\circ$
- b.  $180^\circ$
- c.  $126^\circ$

Name: \_\_\_\_\_

ID: A

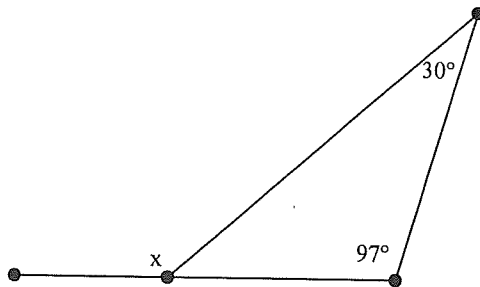
\_\_\_\_ 30. What is the degree of the exterior angle?



- a.  $70^\circ$
- b.  $180^\circ$

c.  $110^\circ$

\_\_\_\_ 31. What is the degree of the exterior angle?



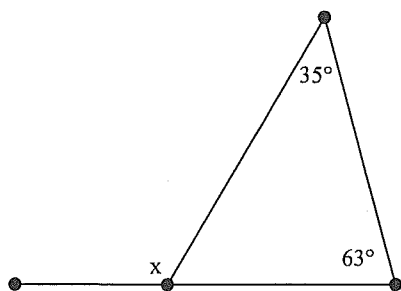
- a.  $180^\circ$
- b.  $53^\circ$

c.  $127^\circ$

Name: \_\_\_\_\_

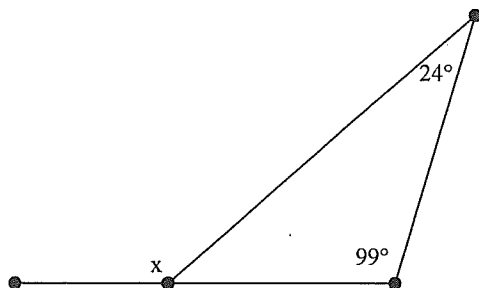
ID: A

\_\_\_ 32. What is the degree of the exterior angle?



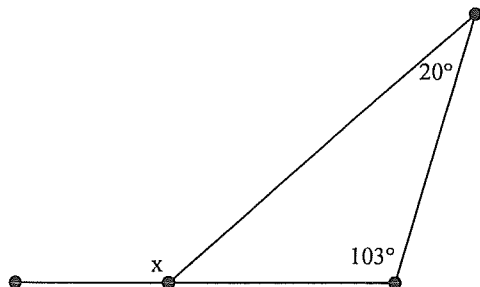
- a.  $98^\circ$
- b.  $180^\circ$
- c.  $82^\circ$

\_\_\_ 33. What is the degree of the exterior angle?



- a.  $180^\circ$
- b.  $123^\circ$
- c.  $57^\circ$

\_\_\_ 34. What is the degree of the exterior angle?



- a.  $123^\circ$
- b.  $57^\circ$
- c.  $180^\circ$